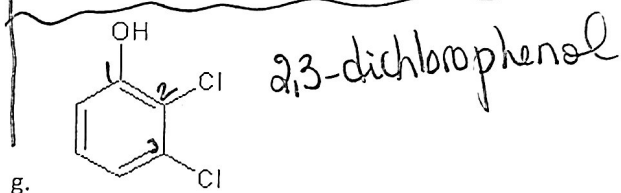
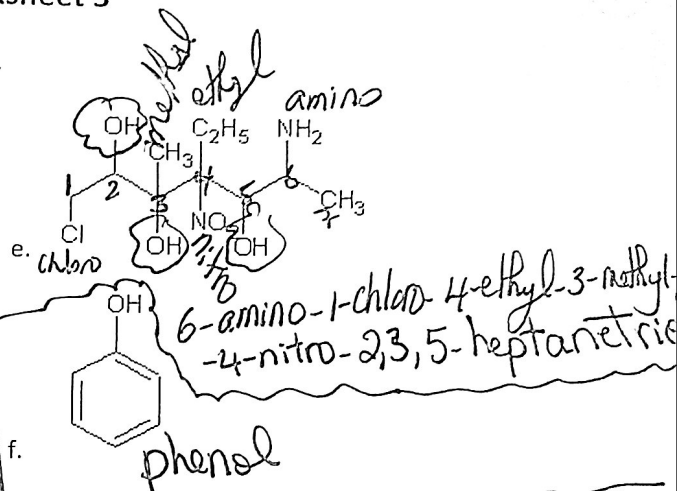

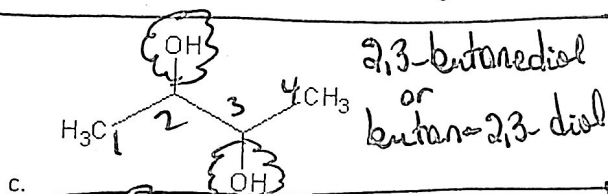
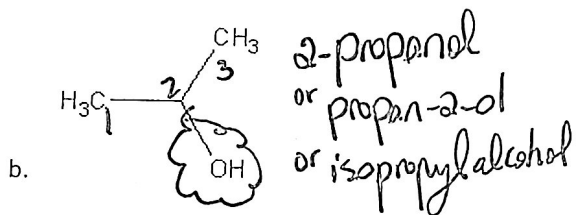


Solutions

Organic Chemistry Worksheet 3

1. Give the IUPAC name for the following organic compounds.



2. Draw the structural formulas for the following organic compounds.

- 1,3-pentanediol
- 3,5-dichlorophenol
- 10-chloro-1-decanol
- 2-ethyl-3-methyl-1-butanol
- 3-methyl-1,2,4-butanetriol
- 1,2,3,4,5,6-cyclohexanehexol
- ethanol
- 1-propanol
- methanol
- 2-ethyl-3,5-dinitrophenol

